



8 cars are in a car park.  
How many wheels are there altogether?

If 3 cars arrive at a party at the same time, each carrying 4 passengers, how many people arrive at once?

Sam did his paper round for 5 days in a row. If he was paid £8 per day, how much money did he earn?

As part of a charity event, 6 children each complete 14 laps of the field. How many laps were run in total?

A class of 30 children are put into 5 football teams. How many children are there in each team?

Holly is sharing 24 sweets between her and her 3 friends. How many sweets will they each get?

18 people go to the cinema and pay £8 each. How much money did the cinema make altogether?

A mum makes a cupcake for each child in her son's school. There are 5 classes with 28 children in each class. How many cupcakes did she make in total?

Grandad George shared £44 equally between his 4 grandchildren. How much money did they each receive?

There are 8 stems of daffodils in a bunch. How many stems are there in 6 bunches?

A supermarket sells muffins in packs of 4. How many muffins are needed to make 12 packs?

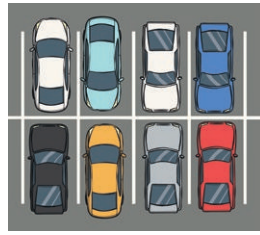
Caroline has 27 stickers. She decides to put 3 stickers on each page of her scrapbook. How many pages will have stickers on?

In a pet shop, each guinea pig is given 4 carrots each per week. There are 9 guinea pigs in the shop. How many carrots are given out each week?

6 pizzas are cut into 8 slices. How many slices of pizza are there altogether?



8 cars are in a car park. How many wheels are there altogether?



A mum makes a cupcake for each child in her son's school. There are 5 classes with 28 children in each class. How many cupcakes did she make in total?

If 3 cars arrive at a party at the same time, each carrying 4 passengers, how many people arrive at once?



Grandad George shared £44 equally between his 4 grandchildren. How much money did they each receive?



Sam did his paper round for 5 days in a row. If he was paid £8 per day, how much money did he earn?



There are 8 stems of daffodils in a bunch. How many stems are there in 6 bunches?



As part of a charity event, 6 children each complete 14 laps of the field. How many laps were run in total?



A supermarket sells muffins in packs of 4. How many muffins are needed to make 12 packs?



A class of 30 children are put into 5 football teams. How many children are there in each team?



Caroline has 27 stickers. She decides to put 3 stickers on each page of her scrapbook. How many pages will have stickers on?

Holly is sharing 24 sweets between her and her 3 friends. How many sweets will they each get?



In a pet shop, each guinea pig is given 4 carrots each per week. There are 9 guinea pigs in the shop. How many carrots are given out each week?


18 people go to the cinema and pay £8 each. How much money did the cinema make altogether?



6 pizzas are cut into 8 slices. How many slices of pizza are there altogether?



8 cars are in a car park. How many wheels are there altogether?



If 3 cars arrive at a party at the same time, each carrying 4 passengers, how many people arrive at once?



Sam did his paper round for 5 days in a row. If he was paid £8 per day, how much money did he earn?




As part of a charity event, 6 children each complete 14 laps of the field. How many laps were run in total?



A class of 30 children are put into 5 football teams. How many children are there in each team?



Holly is sharing 24 sweets between her and her 3 friends. How many sweets will they each get?



18 people go to the cinema and pay £8 each. How much money did the cinema make altogether?



A mum makes a cupcake for each child in her son's school. There are 5 classes with 28 children in each class. How many cupcakes did she make in total?



Grandad George shared £44 equally between his 4 grandchildren. How much money did they each receive?



**REGENT STUDIES**

Focused education on life's walk!  
www.regentstudies.com

There are 8 stems of daffodils in a bunch. How many stems are there in 6 bunches?



A supermarket sells muffins in packs of 4. How many muffins are needed to make 12 packs?



Caroline has 27 stickers. She decides to put 3 stickers on each page of her scrapbook. How many pages will have stickers on?



In a pet shop, each guinea pig is given 4 carrots each per week. There are 9 guinea pigs in the shop. How many carrots are given out each week?



6 pizzas are cut into 8 slices. How many slices of pizza are there altogether?

